

## Homework due 21.11.16

### Bronze

1.  $29 + 37$

---

2.  $48 + 49$

---

3.  $125 + 136$

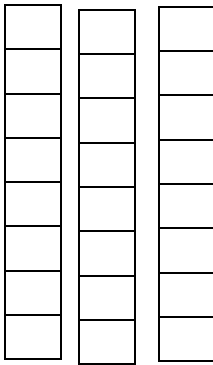
---

4.  $524 + 149$

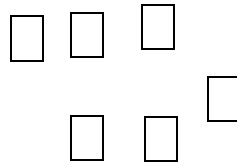
---

# Silver

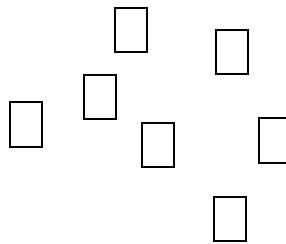
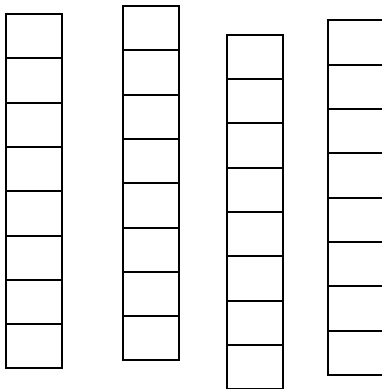
1. Tens



Units



+



2. 124

+ 745

3. 426

+ 543

4. 1768

+ 3241

## Gold

1.  $1756 + 2574$
2.  $3698 + 4257$
3.  $5697 + 1539$
4.  $127 + 257 + 478$
5.  $697 + 158 + 528$
6. Ben collected 456 pokemon cards. George collected 792 pokemon cards. They then double their collection over the next 5 years. How many cards to Ben and George have altogether at the end of the 5 years?